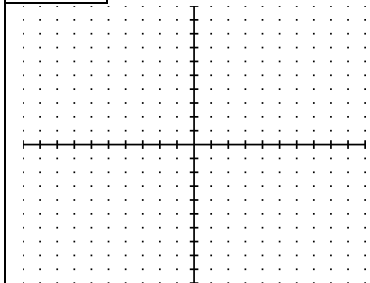
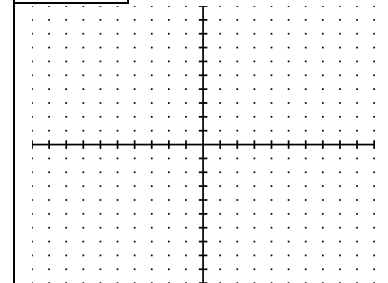
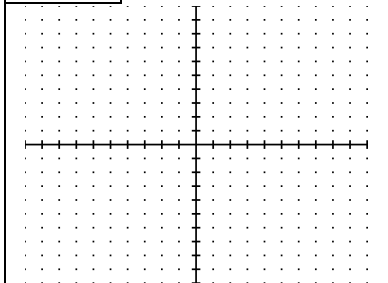
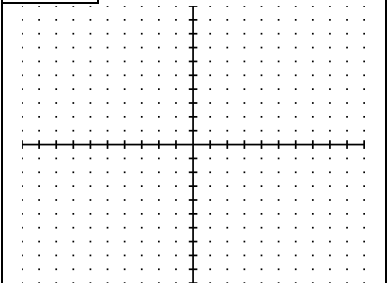
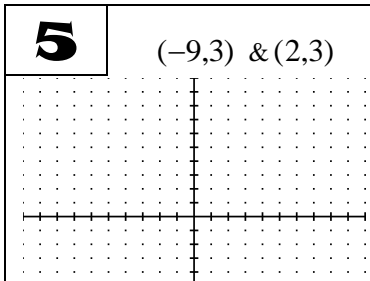
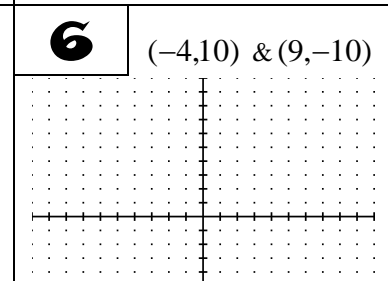
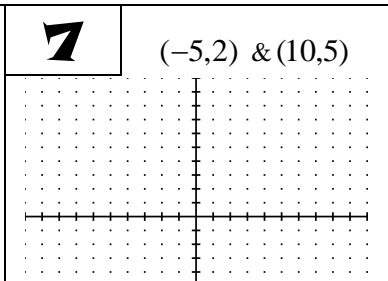
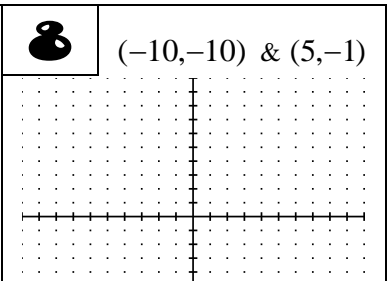
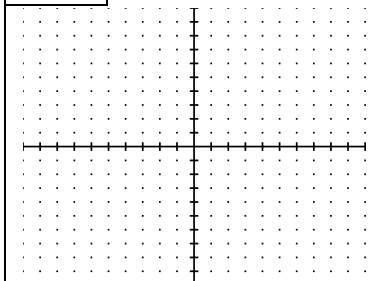
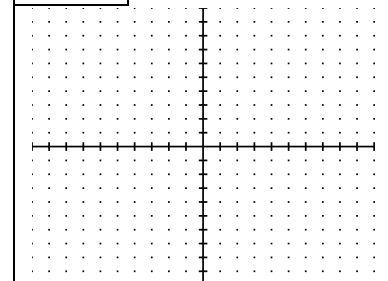
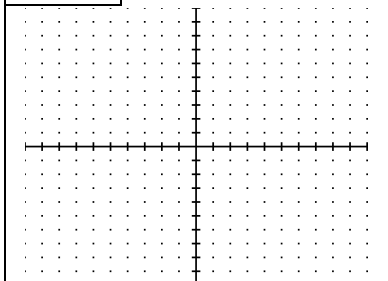
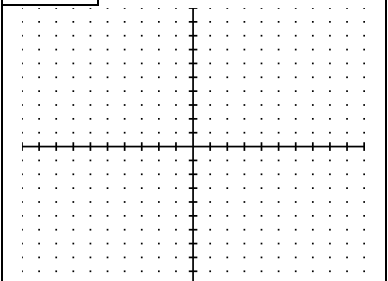
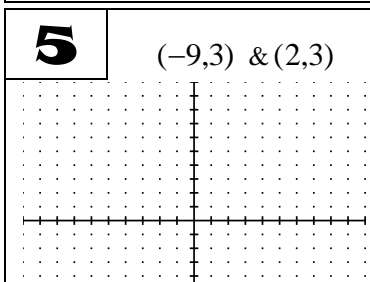
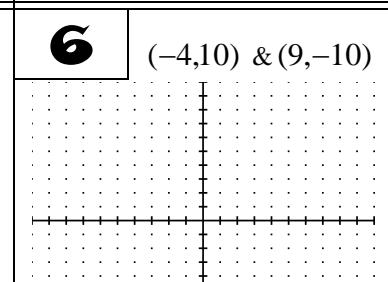
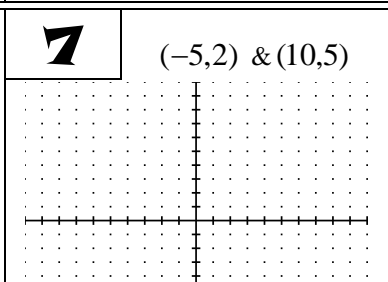
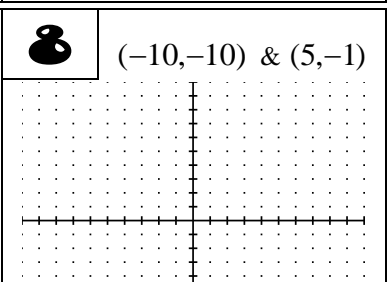


Plot the points, draw the line, and **DETERMINE THE SLOPE**.

<b>1</b> (-9,0) & (6,5)  Slope _____	<b>2</b> (-6,3) & (2,-9)  Slope _____	<b>3</b> (-6,-1) & (6,5)  Slope _____	<b>4</b> (-1,5) & (2,-7)  Slope _____
<b>5</b> (-9,3) & (2,3)  Slope _____	<b>6</b> (-4,10) & (9,-10)  Slope _____	<b>7</b> (-5,2) & (10,5)  Slope _____	<b>8</b> (-10,-10) & (5,-1)  Slope _____

Plot the points, draw the line, and **DETERMINE THE SLOPE**.

<b>1</b> (-9,0) & (6,5)  Slope _____	<b>2</b> (-6,3) & (2,-9)  Slope _____	<b>3</b> (-6,-1) & (6,5)  Slope _____	<b>4</b> (-1,5) & (2,-7)  Slope _____
<b>5</b> (-9,3) & (2,3)  Slope _____	<b>6</b> (-4,10) & (9,-10)  Slope _____	<b>7</b> (-5,2) & (10,5)  Slope _____	<b>8</b> (-10,-10) & (5,-1)  Slope _____